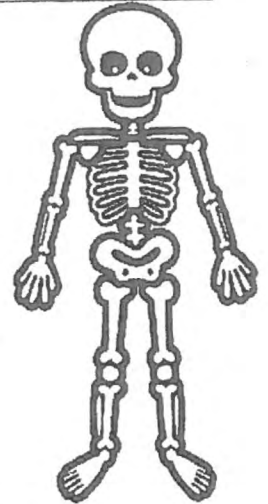


**INDIAN SCHOOL MUSCAT
PRIMARY SECTION**

Subject: Science	Semester I	Name:
Topic : The Human Body	Worksheet No. 6	Std : III Sec. ____
Resource Person: Ms. Sakina K.		Roll No. __
Teacher's Signature:		Date: / / 2018

I. Answer the following.

1. What is our skeletal system made up of? How does it help us?



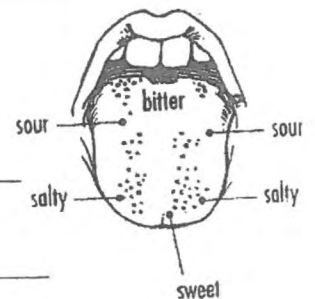
2. Name the organs involved in breathing system.

3. What happens to the food in the small intestine?

II. Think and answer.

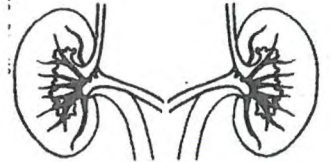
1. It doesn't hurt when you get a haircut.

2. What happens if there were no taste buds on our tongue?

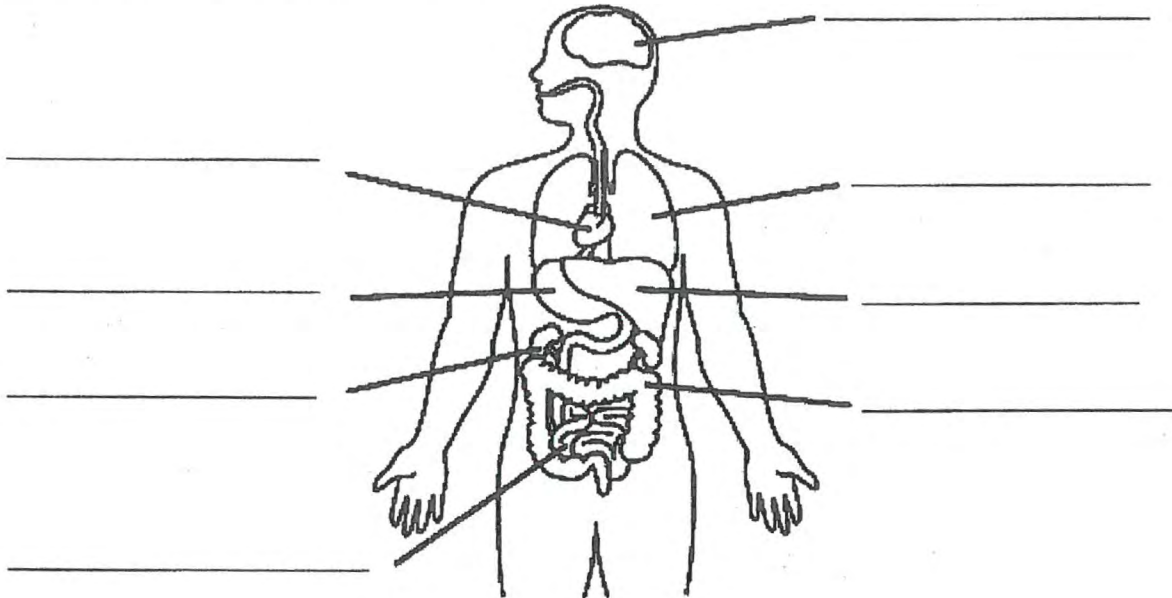


3. Exercise is essential for our body.

III. State two functions of the kidney.



IV. Name the organ systems and label its parts.



Organ Systems	Parts